


Name \_\_\_\_\_


Date \_\_\_\_\_

# Animal Addition Practice +


Add together the animals that are in each box, and write your answer in the box on the right.




$$\begin{array}{r} 2 \\ +2 \\ \hline \end{array}$$



$$\begin{array}{r} 3 \\ +2 \\ \hline \end{array}$$



$$\begin{array}{r} 2 \\ +1 \\ \hline \end{array}$$



$$\begin{array}{r} 4 \\ +1 \\ \hline \end{array}$$