




Winter Addition

Look at the number of winter objects in the problems below and write the addition equation below it.



 2 +  1 =  3
_____ + _____ = _____

 1 +  3 =  4
_____ + _____ = _____

 2 +  3 =  5
_____ + _____ = _____