


Plus One


Name: _____

Date: _____

Complete each equation.


$4 + 1 = \square$


 + 1 = \square

 + $\square = \square$

$9 + 1 = \square$


$7 + 1 = \square$

 + 1 = \square

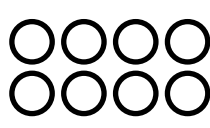
 + $\square = \square$


$2 + 1 = \square$

$5 + 1 = \square$

 + 1 = \square

$8 + 1 = \square$

 + 1 = \square

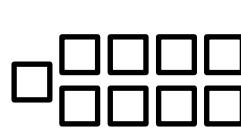
 + $\square = \square$

$1 + 1 = \square$

$6 + 1 = \square$

 + 1 = \square

$3 + 1 = \square$

 + 1 = \square